

NARAKE'S PANHALA PUBLIC SCHOOL & JUNIOR COLLEGE, PANHALA

Kolhapur's First English Medium Residential School

Class 6

1.English

2. Science

3. Mathematics

4. Social Science

5. Marathi

6. Hindi

More about verbs

B Choose the correct verb from the box to fill in each blank.

1. The sun _____ brightly.
2. The stars _____ at night.
3. It _____ funny.
4. I _____ watching TV.
5. He _____ coffee a lot.

shine	shines
twinkle	twinkles
sound	sounds
enjoy	enjoys
drink	drinks

C Fill in the blanks with the verbs below. Add 's' to the verb where necessary.

fly	give	set	roar	smell
run	boil	bark	croak	climb

1. A monkey _____ a tree.
2. Lions _____.
3. A bat _____ at night.
4. Frogs _____ in summer.
5. The Sun _____ us light.
6. Water _____ at 100 degree C.
7. Dogs _____ at strangers.
8. The sun _____ in the west.
9. A rose _____ sweet.
10. Hares _____ fast.

Worksheet No 2

Parts of Speech

Look at the words we have learnt and decide which part of speech they are (noun, verb, or adjective). Drag the words to the correct column in the table below:

assist	bond	claim	compulsory	contribute
demand	elderly	enable	heartwarming	identify
initiate	participate	population	require	reward
slavery	take part in	variety	volunteer	weak
curriculum	include	shelter	worthwhile	

Noun	Verb	Adjective

Worksheet No 3

Topic: Part of Speech - Nouns, Verbs, Adjectives & Pronouns

Read each sentence and look at the underlined word. Press the correct box that shows the part of speech of each underlined word

Sentences	Noun	Verb	Adjective	Pronoun
Example: The frog <u>jumped</u> .				
David reads <u>many</u> books.				
<u>Ethan</u> runs to meet his dog.				
He is a <u>friendly</u> boy.				
<u>She</u> has big dolls.				
The old lady <u>picked</u> up the bag.				
The <u>toy</u> is in his pocket.				
Will you come with <u>us</u> ?				
She asked <u>him</u> to visit Trinity.				
The <u>dark</u> clouds covered the sky.				
Ariann lives in <u>Carrington Village</u> .				
The school has a <u>high</u> fence.				
<u>We</u> love to read.				
<u>It</u> is a fine day.				
The <u>monkey</u> ate the banana.				
My friends <u>swim</u> well.				
Mr. Miller asked for <u>you</u> today.				
The truck could not pass the <u>narrow</u> road.				
Did you see <u>him</u> ?				
The stood in the <u>golden</u> sand.				
The boy <u>fell</u> off the ladder.				
I pray before I go to <u>school</u> .				
Where are <u>you</u> going?				
Atarah has the new <u>ruler</u> .				
She <u>is eating</u> the apple.				
<u>I</u> am riding my little bike.				
This is a <u>soft</u> ball.				
She is <u>prettier</u> than her sister.				

Learning Adverb Worksheet

An adverb is a word that describes a verb, an adjective, or another adverb. Adverbs fall into three categories; When, Where, and How.

Directions: Circle the adverb in each sentence.

Example A: The tall player quickly jumped for the ball.

Answer: quickly

1. The boy calmly took his test.
2. The team eagerly awaited their next opponent.
3. The player politely asked the official a question.
4. The teams shook hands sincerely after the game.
5. The girl clumsily walked to her seat.
6. The boy walked dangerously close to the edge.
7. I barely finished my test on time.
8. The boy foolishly talked back to his teacher.
9. The woman joyously shouted aloud.

Objective	To reinforce concept of A and An
Instructions	Complete the exercise below with a/an

1. This is _____ apple.

2. This is _____ bat.

3. This is _____ astronaut.

4. This is _____ ostrich.

5. This is _____ caterpillar.

6. This is _____ dinosaur.

7. This is _____ umpire.

8. This is _____ fish.

9. This is _____ igloo.

10. This is _____ orange.

English Tense



Read the statements given below and choose the correct option and identify as directed:

- The simple present tense:-
 - (i) is going to (ii) sings
 - (iii) flew (iv) both (i) and (ii)
- The simple past:-
 - (i) grew (ii) grow
 - (iii) grown (iv) both (i) and (ii)
- The future tense:-
 - (i) doing (ii) done
 - (iii) do (iv) will do
- For the future planned action, we use:-
 - (i) I will be going (ii) I can go
 - (iii) I should go (iv) I must go

Write the type of tense.



- He reads a story. ➡
- He sold his car. ➡
- We shall go there. ➡
- We are all Indians. ➡
- It has rained heavily. ➡



Choose an Action Verb

grasped

biked

climbed

caught

walked

lifted

laughed

ran

scattered

jumped

skipped

giggled

Choose one of the action verbs above to complete each sentence.

64. Olaf _____ to the store.

65. Jennifer _____ across the field.

66. Marsha _____ at his joke.

67. Jeanine _____ the ball at the

last moment.

68. The mailman _____ over the dog.

69. The leaves _____ across the lawn.

70. The girls _____ at the movie.

Directions: Complete the sentences with words from the word bank.

word bank: of without from for with about

- 1.) I walked _____ my best friend to the store.
- 2.) James finished the project _____ help from anyone.
- 3.) I brought the flowers _____ you.
- 4.) She is _____ Japan.
- 5.) I read an amazing book _____ cowboys.
- 6.) Grandma brought us a bag _____ apples.

What do these prepositions show? _____

Fun with magnets

1. Where was the first natural magnet formed?

.....
..

2. Name a magnetic material ?

.....
..

3. What are the two ends of a magnet called ?

.....
..

4. Name the natural magnet?

.....
..

5. MCQ_ Tick () the correct option _

I A force that pushes away some thing is called

- | | |
|--------------|---------------|
| a) Repulsion | c) Attractopm |
| b) Action | d) Friction |

II Which of the followings is not a magnetic material?

- | | |
|---------|-----------|
| a) Iron | c) Nickel |
| b) Gold | d) Cobalt |

III The power of a magnet is concentrated at its.

- | | |
|-----------|------------------|
| a) Centre | c) Poles |
| b) Sides | d) Whole Surface |

IV A magnet has _

- | | |
|------------|-------------|
| a) 4 poles | c) No poles |
| b) 2 poles | d) 3 poles |

6. Draw two types of magnet and name them?

.....

.....

Key words :- Compass, Attract, Magnetic, Repel

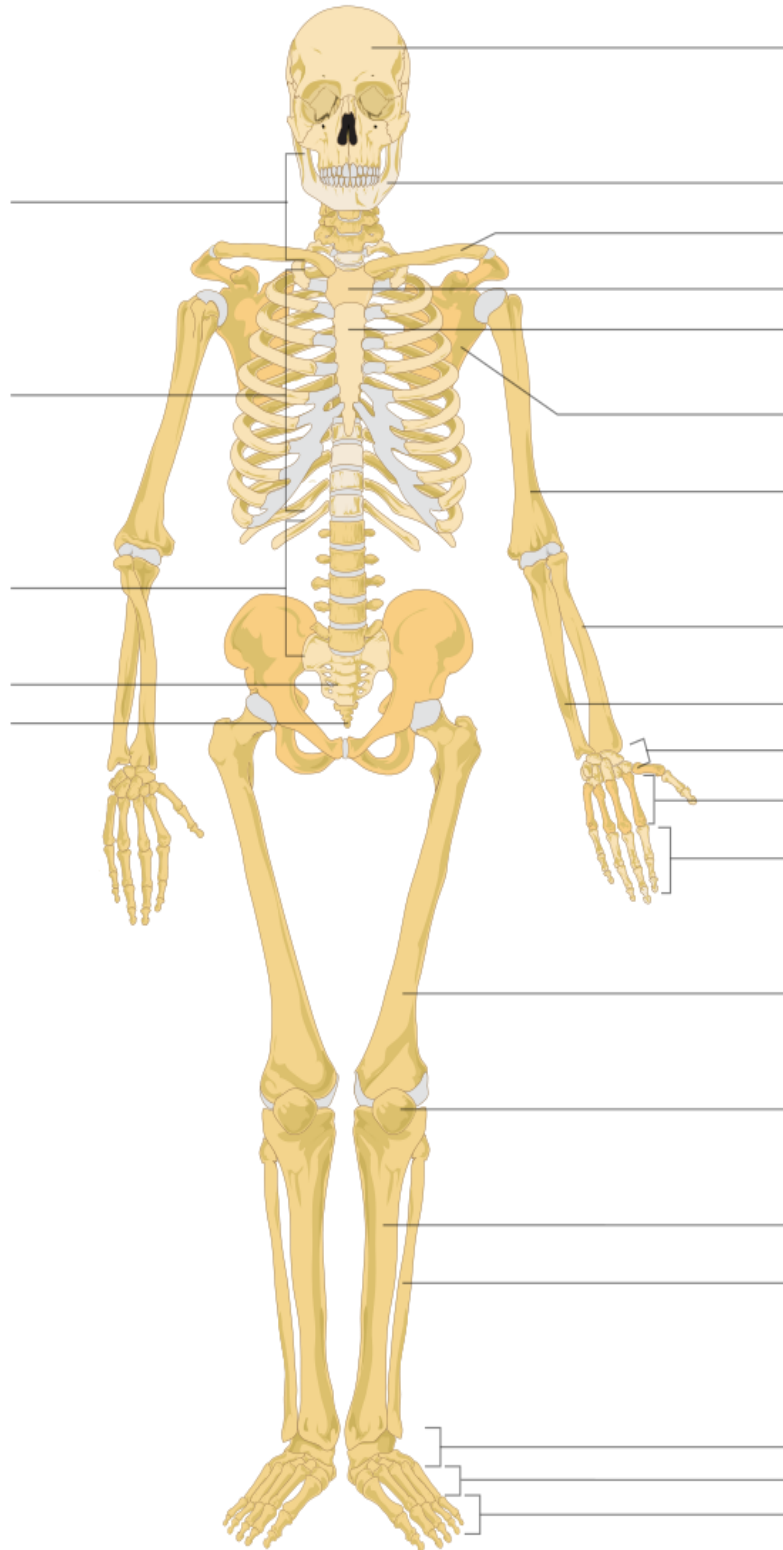
7. Fill in the blanks key words _

- a) the material which are attracted towards a magnet are called_____ material.
- b) Similar poles of a magnet_____each other.
- c) _____ is used to find directions.
- d) Opposite poles of a magnet_____ each other.

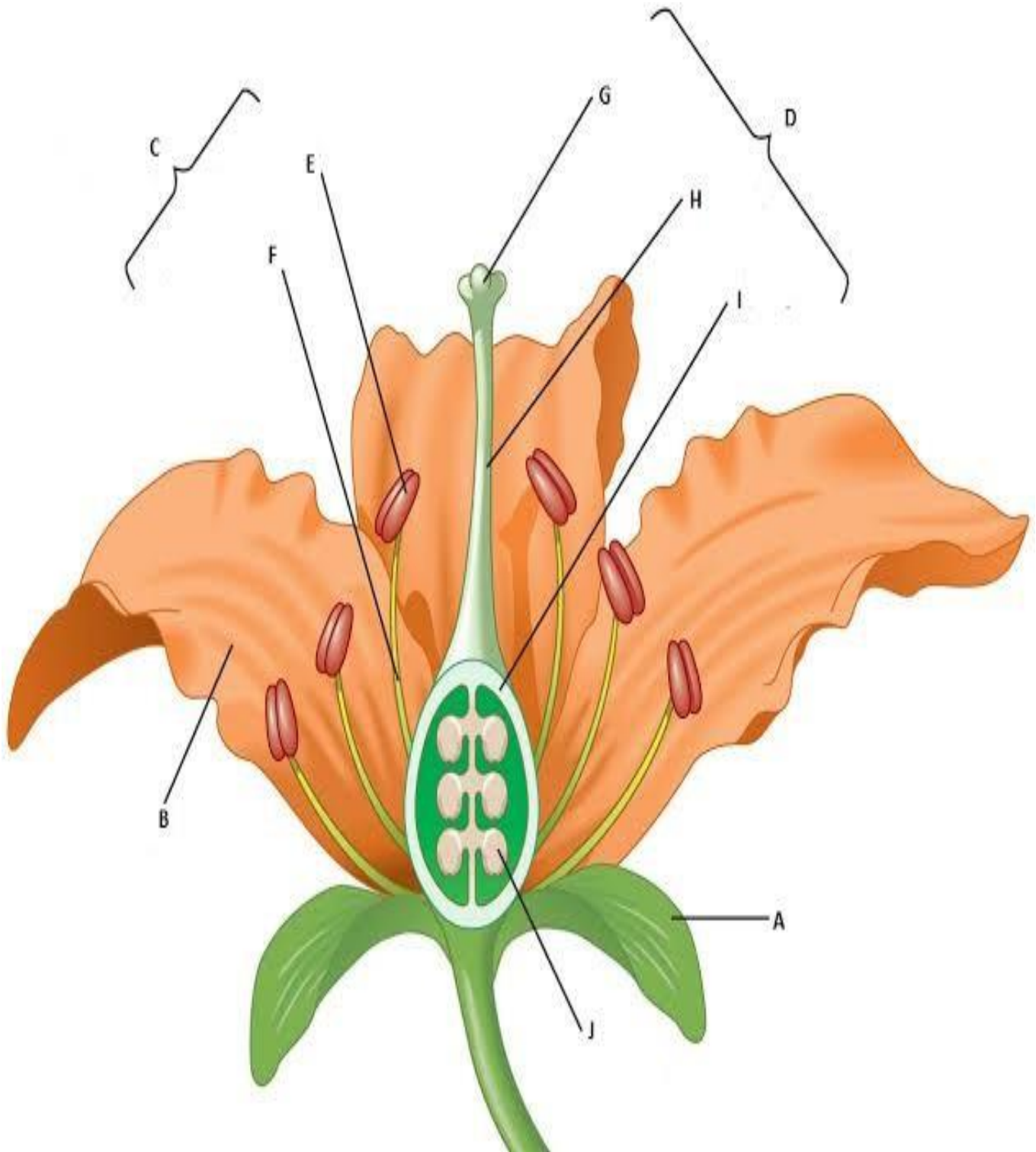
8. Write true or false _____

- a) Plastic is a magnetic material.
- b) A cylindrical magnet has only one pole.
- c) A magnet has two poles.
- d) A magnet attached with crane is used for picking iron from junkyard.

Label the diagram of human skeleton:



Label the diagram of part of
flowers:



Complete the following Table:

6th Grade Science Worksheets



Human Bones Word Search

The names of different human bones have been cleverly concealed below. Can you find them? Use the Word Box for pointers.
(Find the solution on the next page.)



Word Box

Femur sternum cranium patella scapula tibia pelvis

T	S	D	V	D	M	M	M	P	C	S	C	W	O	W
E	B	A	F	W	U	C	E	A	M	T	R	L	W	X
L	V	V	X	N	Z	L	T	R	R	H	N	S	Y	O
W	Q	M	R	A	V	H	C	I	H	I	K	E	T	I
T	P	E	H	I	C	F	M	M	R	O	R	H	F	F
Z	T	A	S	P	R	U	S	K	S	O	B	T	T	O
S	W	A	T	C	R	A	N	I	U	M	C	D	H	N
O	K	A	Z	E	D	W	H	S	J	L	W	M	E	Z
S	B	K	I	P	L	D	Z	C	G	M	J	Z	P	Y
X	S	J	V	B	X	L	F	A	P	X	L	N	J	U
H	M	E	W	A	I	X	A	P	L	M	X	C	N	R
Q	I	N	Q	Y	W	T	W	U	C	M	Z	T	F	C
J	Y	K	H	Y	B	W	W	L	R	U	M	E	F	N
P	T	Z	B	S	K	E	B	A	A	V	C	E	Q	M
W	B	O	G	I	Q	D	U	C	J	A	A	A	Z	E

Complete the following Table:

Plant name	Column 1 Height	Column 2 Stem				Column 3 Where do the branches appear		Column 4
		Green	Tender	Thick	Hard	At the base of the stem	Higher up on the stem	Category of plant
Tomato	Shorter than me	Yes	Yes					Herb
Mango	Much taller than me			Yes	Yes		Yes	Tree
Lemon	Slightly taller than me				Yes	Yes		Shrub

Complete the following Table:

Waste generated at home	Waste generated at school	Waste generated in the market/on road

Mathematics

Worksheet No 1

Solve the following questions by using BODMAS rule

1) $17 \times 26 \div 13$

2) $78 \div (11 - 8)$

3) $(59 + 36) \div 19$

4) $23 - (29 - 9)$

5) $(44 - 12) \div 16$

6) $9 + 12 + 27$

7) $40 \div (23 - 15)$

8) $6^2 - 3$

9) $5 + 15 - 3$

10) $30 - 7 + 15$

11) $4 + 22 + 30 - 2$

12) $27 \times 2 - 4 + 15$

13) $19 - 7 - (4 + 6)$

14) $6 + 8 + 14 - 20$

15) $4 \times (56 - 23) \div 11$

16) $33 \div (25 - (18 + 4))$

17) $2 \times 42 \times 7$

18) $(27 - 22) \div 5 \times 29$

19) $(9 + 4) \times 18 - 7$

20) $(1 + 13) \div 14 \times 8$

21) $(25 - 23)(15 - 7) + 27$

22) $72 \div (23 - (4 + 11 + 4))$

23) $(84 \times 2) \div 7$

24) $5 \times 6 \times 88 \div (4 + 18)$

25) $(45 \times 2) \div (28 - (14 + 9))$

26) $(16 - 12) \div (11 - (23 - 14))$

27) $(6 + 10 + 8) \div (13 - 5)$

28) $(30 \times 2) \div 5 + 1$

29) $(23 - 15)2 + 14 - 6$

30) $(45 \times 2 \times 2) \div 15$

Worksheet No 2

Things to Remember

- 1) V, L and D are never subtracted.
 - 2) I can be subtracted from V and X once only. X can be subtracted from L and C once only.
 - 3) C can be subtracted from D and M once only.
 - 4) Thus I and V is never written to the left of L or C. I is never written to the left of C.
- with the help of the symbols I, V, X, L, C we can write numbers upto 399.

Q 1. Write the following in Roman numerals.

- a. 12 = b. 52 = c. 85 =
d. 59 = e. 101 = f. 76 =

Q2. Write the following in Hindu. Arabic numerals.

- a. LXIII = b. XCII =
c. LXXVI = d. XXXVII

Q3. Insert <, > or = in the given boxes.

a. LX XC

b. XCVI XCIV

c. LXXXIX XCVIII

Q4. HOT Question: I as a Roman numeral, am CMXCIX.

Break me up and then can you recognize me?

Q5. Arrange the following in ascending order.

C, LVII, XXXVI, XC, XCV, XXIV,

Q6. Multiple Choice Questions

- a. Which of the following sets of numbers are written in ascending order?
- a. V, L, X, I b. I, V, L, X
c. I, V, X, L d. X, V, I, L
- b. The Roman numeral representing the least digit is:
- a. X b. M
c. C d. D

Question 1

Fill in the blanks:

- a) 1 lakh =-----ten thousand
- b) 1 million =----- hundred thousand
- c) 1 crore =-----ten lakh
- d) 1 crore =-----million
- e) 1 million =-----lakh

Question 2

Place commas correctly and write numerals:

- a) Seventy-three lakh seventy-five thousand three hundred seven
- b) Nine crore five lakh forty one
- c) Seven crore fifty-two lakh twenty one thousand two hundred two
- d) Fifty- eight million four hundred twenty -three thousand two hundred two
- e) Twenty- three lakh thirty -three thousand ten

Question 3

Insert commas suitable and write the names according to Indian system of numeration:

- a) 875957
- b) 8546283
- c) 99900046
- d) 98432701

Question 4

Insert commas suitable and write the names according to International system of numeration:

- a) 78921092
- b) 7452483
- c) 99985102
- d) 48049831

Question 5

Write all the factors of following:

- a) 24
- B 12
- c) 40
- d) 23
- e) 36

Social Science


Worksheet 1

CHOOSE THE RIGHT ANSWER :

1. _____ are the prime attractions for tourists in Tamil Nadu.
2. Vellore fort is a _____ century fort situated in Vellore.
3. _____ fort is also called Dindigul Malai Kottai.
4. Thirumayam Fort is located in _____.
5. Gingee fort is built across _____ hills.
6. _____ is popular for its large rock inscriptions.

TRUE OR FALSE :

1. Gingee fort is a good example of military architecture.
2. Fort St. George is the first fort built by the British in India.
3. Sadras fort is located in Madurai.
4. Cholas, Pandayas, and Nayakkars constructed magnificent forts and palaces.



MY SUMMER HOLIDAY



I love summer holidays!

I usually spend my summer holidays with
.....at.....

I always take my..... with me.

We usually stay in a

On sunny days we and
..... We have a lot of fun

together!

I love summer holidays because
.....

It makes me feel so happy!

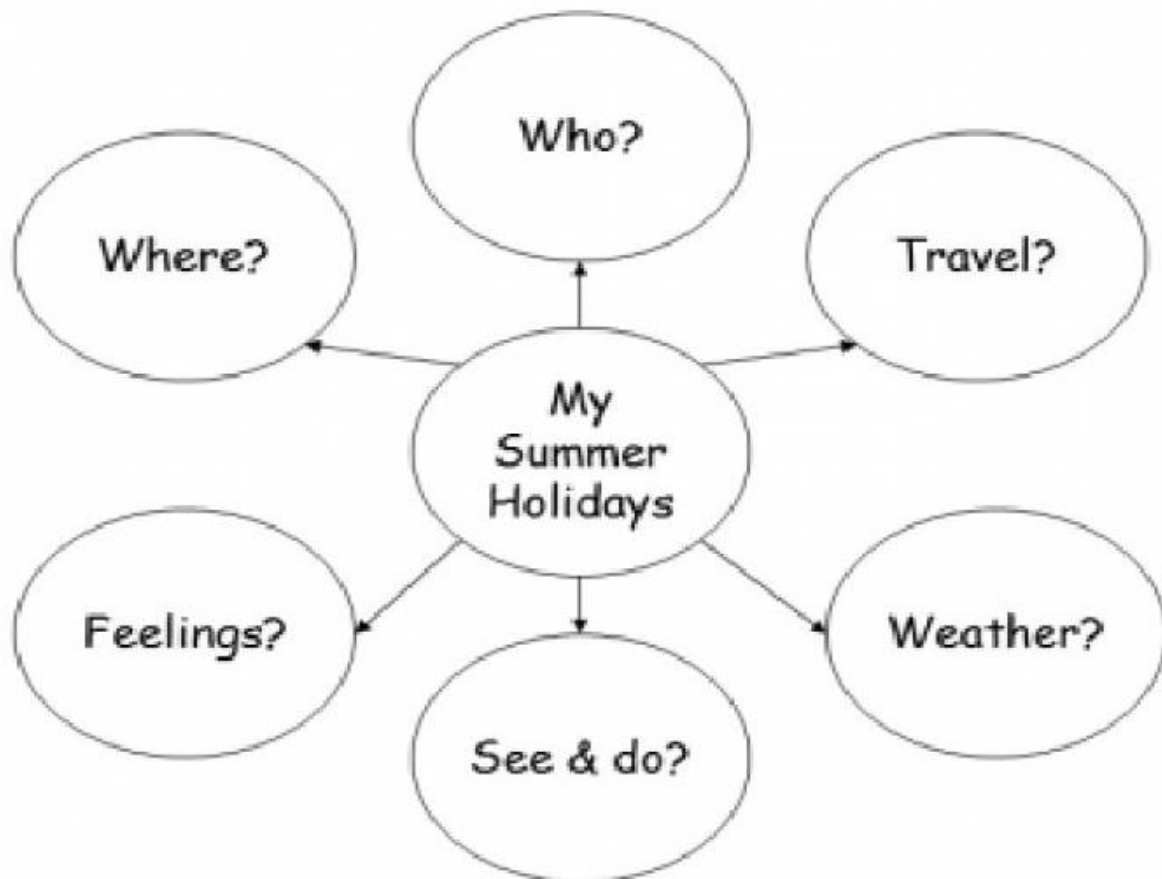
Do you like summer holidays? What do you do in
your holiday?



My Summer Holiday



Write about what you did for your summer holidays last year. Use the map below to help you.



I. Choose the correct answer.

1. Mahmud of Ghazni raided India
a. 10 times b. 12 times c. 15 times d. 17 times
2. The capital of the cholas was
a. Madurai b. Thanjavur c. Kanchipuram d. Kannauj
3. The court language of the Mughals was.
a. Hindi b. Sanskrit c. Persian d. Urdu
4. Ain-i- Akbari was written by
a. Chand Bardai b. Abul Fazal
c. Minhaj – Siraj d. None of these
5. Sun temple is located at.
a. Amritsar b. Madhya Pradesh c. Konark d. Kanchipuram

II. Match the State with Its Parliamentary Constituencies.

- | | | |
|-------------------|---|----|
| 1. Andhra Pradesh | - | 20 |
| 2. Karnataka | - | 39 |
| 3. Kerala | - | 28 |
| 4. Tamil Nadu | - | 17 |
| 5. Telangana | - | 25 |



1. Which is the seventh planet in the solar system ? _____
2. How many oceans are there on the earth ? _____
3. What do we call the movement of earth on its own axis? _____
4. Which planet is called as Earth's twin? _____
5. What is the distance between the sun and the earth? _____
6. How do we call the deepest point on the ocean? _____
7. The Earth is covered by 71% of water _____
8. Moon is the only satellite of Venus _____.
9. The biggest continent is Australia. _____
10. Seasons are caused by earth's revolution. _____



Uranus

Venus

Mariana Trench

5

Rotation

150 million kms



Christmas Word Search



S	T	A	R	M	T	R	I	N	E	B	R	I	E
O	E	H	D	L	E	S	T	L	E	N	C	I	D
L	I	N	L	L	I	G	H	T	S	R	L	R	E
L	I	E	R	E	L	S	L	E	I	G	H	T	C
N	B	S	E	O	E	M	C	S	H	D	C	P	O
E	G	S	E	T	N	E	A	S	O	Y	G	R	R
E	C	S	L	T	D	B	M	T	I	R	C	E	A
R	E	R	E	I	N	D	E	E	R	I	Y	S	T
G	L	D	G	T	A	O	C	L	I	N	A	E	I
T	M	A	N	T	A	D	T	E	S	I	G	N	O
S	C	N	A	T	Y	A	E	E	I	T	T	T	N
R	I	L	C	R	A	S	L	E	T	T	I	T	R
C	A	N	D	Y	C	A	N	E	I	S	T	A	E
C	H	R	I	S	T	M	A	S	T	R	E	E	I

candy cane

lights

star

reindeer

present

decoration

bell

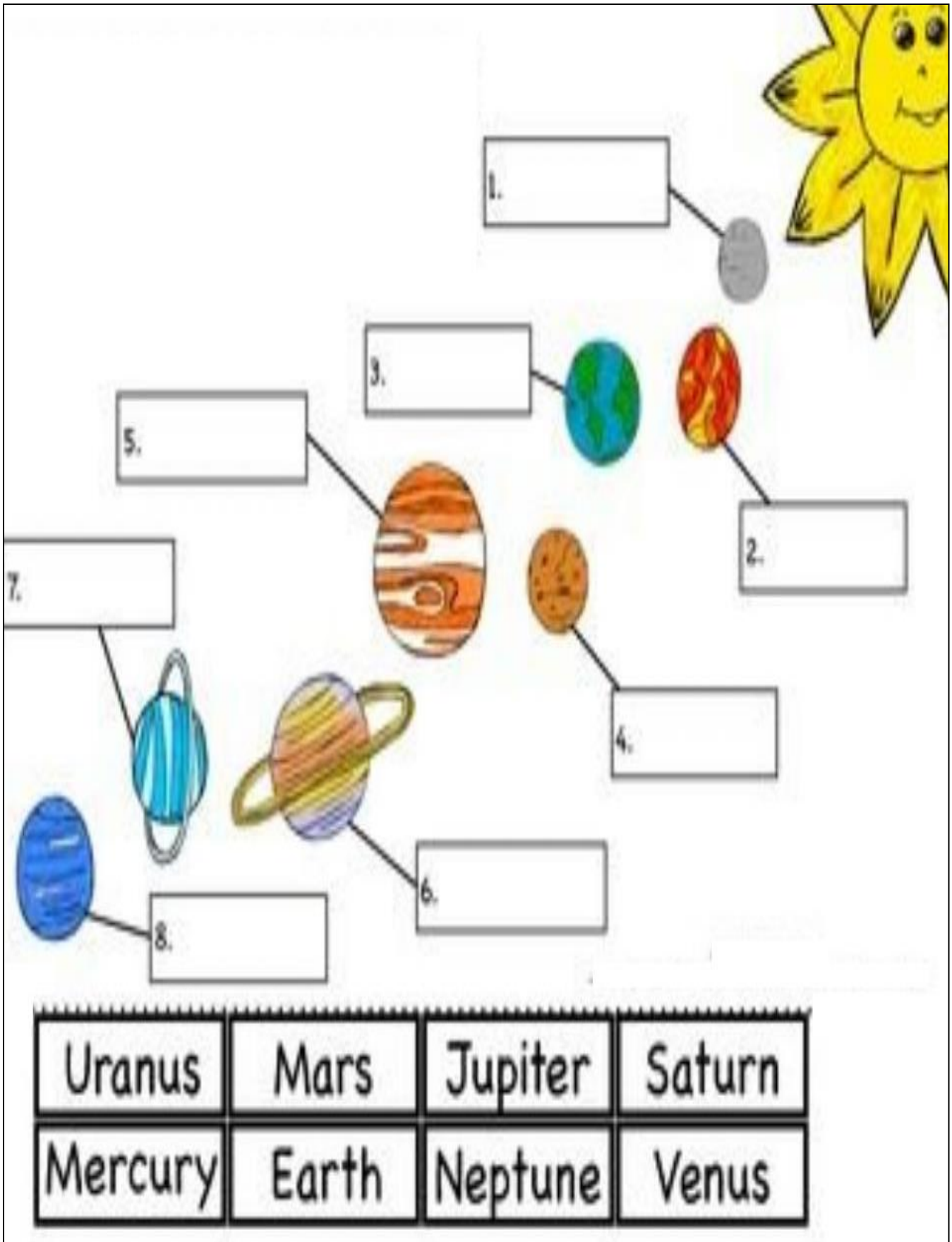
sleigh

angel

Christmas tree



Worksheet 7



I. State True or False.

1. Stone tools belonging to Old Stone Age have been excavated at Atthirampakkam near Chennai.
2. The materials used by the ancient people are preserved in the museums by the Archaeological Department.
3. During the period of Ashoka, Buddhism spread across the country.

II. Match the following:

- | | | |
|-------------------------|---|-----------------------------|
| a. Rock paintings | - | Copper Plates |
| b. Written records. | - | The most famous king |
| c. Ashoka | - | Devaram |
| d. Religious Literature | - | to understand the lifestyle |

III. Fill in the blanks:

1. A comprehensive account of Ashoka was provided
by
2. has been derived from the greek word 'Istoria'
3. The meaning of Dhamma in Prakrit

History

Path of righteousness

Charles Allan

Marathi

Work sheet No 1

वाढदिवस आहे त्याला / तिला शुभेच्छा देणारे पत्र लिहा.

.....

.....

.....

.....

.....

.....,

[illegible]

.....

.....

Work sheet No 2

प्रश्न . निबंध लिहा. (मुद्दांच्या आधारे)

१. शाळेचे नाव - २. शाळेचा परीसर - ३. शाळेतील वर्ग - ४. शाळेतील शिक्षक -
५. शाळेतील सुविधा - ६. शाळेतील आहार- ७. शाळेतील विविध कार्यक्रम -
८. शाळेत भेटलेले नवीन विद्यार्थी - ९. सुंदर इमारत - १०. शाळेबाबत प्रेम-

Hindi

Worksheet 1

रिक्त स्थान शब्द भरकर अनुच्छेद पूरा कीजिए

तिरंगा झंडा

हरा	चक्र	सम्मान	तिरंगा	चौबीस
केसरिया	संदेश	राष्ट्रीय	खुशहाली	शान
सफेद	शांति	तीन	वीरता	प्रगति

हमारे देश के झंडे का नाम _____ है। यह हमारा _____ झंडा है। इसमें _____ रंग हैं। सबसे ऊपर _____ रंग है, बीच में _____ और सबसे नीचे _____ है। झंडे का केसरिया रंग _____ का है। तिरंगे का सफेद रंग _____ का _____ देता है। इसका हरा रंग हमारी _____ और समृद्धि को दर्शाता है। सफेद रंग के बीच में एक _____ है। इसमें _____ तीलियाँ हैं। यह हमें _____ करने का संदेश देता है। तिरंगा झंडा हमारे देश की _____ है। हमें अपने झंडे का _____ करना चाहिए।

Worksheet 2

नीचे दिए चित्र का अपने शब्दों में वर्णन कीजिए



Worksheet 3

1. रवि ----- दोस्त है। (मेरा / उसने)
2. ----- ठीक समय पर स्कूल जाता है। (वह / उसका)
3. अध्यापक ----- प्यार करते हैं। (उसने / उसे)
4. ----- पिता इंजिनीयर हैं। (उसके / वह)
5. ----- माँ डॉक्टर हैं। (मैं / उसकी)
6. ----- घर बहुत बड़ा है। (उन्होंने / उसका)
7. ----- कल दिल्ली जाएँगे। (हम / तुम)
8. अभी ----- बाज़ार जाना है। (मुझे / उसने)
9. ----- सिनेमा देख रहा हूँ। (उसका / मैं)
10. ----- क्या कर रहे हो? (तुम / हम)

वर्णमाला

चित्र को देखकर निम्न वर्ग पहेली में उनके नाम ढूँढो



सि	पा	ही	ज	प	पी	ता
क	ग	रा	नी	ब	ला	उ
सी	ढी	ज	ढ	घ	ड	जी
टी	ठ	म	ग	र	म	भ
छ	द	क	भ	ती	र	म
ल	क	ड़ी	ज	प	न	घ
क्ष	ली	फ	रे	ल	गा	ड़ी



प्र. 1) संज्ञा शब्द चुनो ।

- 1) यह एक बगीचा है ।
- 2) फल टोकरी में है।
- 3) महालक्ष्मी दिल्ली में रहती है ।
- 4) चिड़िया उड़ रही है ।

प्र. 2) खाली स्थान पर संज्ञा शब्द भरो:

कौआ सेब आगरा फूल जनवरी

- 1) मुझे.....पसंद है।
- 2) पेड़ पर.....बैठा है।
- 3)में बहुत ठंड थी ।
- 4) ताजमहाल.....में है ।

प्र. 3) दिए गए अनेक शब्दों के लिए एक शब्द छाँटो:

किसान मोची जादूगर सत्यवादी

- 1) जो जूते बनाता हो -
- 2) जो अनाज उगाता हो -
- 3) जो सदा सच बोलता हो -
- 4) जो जादू दिखाता हो -

प्र. 4) जोड़े बनाओ -

- | | |
|-------------------------------|--------------|
| 1) जो कविता लिखता हो | अ) लुहार |
| 2) जो लोहे का काम करता है | ब) साप्ताहिक |
| 3) सप्ताह में एक बार होनेवाला | क) मांसाहारी |
| 4) जो मांस खाता हो | ड) कवि |

Worksheet 6

मां और बेटे के बीच पढाई के संबंध होनेवाले संवाद को लिखिए

माँ :-

.....

[illegible]

Worksheet 7

निम्नलिखित वाक्यों में अधोरेखांकित शब्दों के लिंग चुनिए ।

1. हमने नई कार खरीदी।

पुल्लिंग

स्त्रीलिंग []

2. नीना के बाल काले हैं।

पुल्लिंग

स्त्रीलिंग

3. उसने चाय पीली ।

पुल्लिंग

स्त्रीलिंग

4. रेलगाडी स्टेशन में खड़ी है ।

पुल्लिंग

स्त्रीलिंग

5. छाता भीग गया ।

पुल्लिंग

स्त्रीलिंग

6. पर्वत ऊँचा होता है।

पुल्लिंग

स्त्रीलिंग

7. नदी बह रही है।

पुल्लिंग


स्त्रीलिंग

विशेषण

नाम :

चित्र के लिए सही विशेषण शब्द चुनें ।

लाल मीठा गरम रंग बिरंगे हरा



_____सेब



_____लड्डू



_____पत्ता



_____चाय



_____फूल