

NARAKE'S PANHALA PUBLIC SCHOOL & JUNIOR COLLEGE, PANHALA

Kolhapur's First English Medium Residential School

Class 5

1.English

2. Science

3. Mathematics

4. Social Science

5. Marathi

6. Hindi

My daily routine

My name is Haley. Today I will tell you about my daily routine. I get up in the morning then I get ready for my school. I go to my school with my school bus. After coming back from school I change my clothes wash my hands and do my lunch. Then I go to sleep and play in the evening.



1) Haley get up in the morning and get ready for ____.

- a) office b) party c) school

2) Haley goes to her school with her ____.

- a) school bus b) friends c) mother

3) What does Haley do after coming back from school?

- a) go to play b) change her clothes c) dance

4) When does Haley play?

- a) afternoon b) evening c) night

Words and their Meanings



Circle the word that has the same meaning.

1. correct in all details; exact

careless

accurate

mistaken

general

2. personal belongings packed in suitcases for traveling; luggage

bill

check

note

baggage

3. prevent someone from giving full attention to something

distract

anger

upset

calm

4. unable to rest or relax as a result of anxiety or boredom

collected

composed

restless

quiet

5. very fine in texture or structure; of intricate workmanship or quality

firm

strong

delicate

healthy

6. strange or odd; unusual

peculiar

normal

vague

ordinary

7. cause a person or animal to feel sudden shock or alarm

calm

reassure

composed

startle

8. a short journey undertaken in order to deliver or collect something

errand

charge

visit

role

Complete the sentences using **is** or **are**.

- There _____ some spaghetti. There _____ some cheese.
- There _____ some eggs. There _____ some apples.
- There _____ some juice. There _____ some lemonade.

Choose the correct answer .

1. How _____ apples _____ there?



2. How _____ honey _____ there?



3. How _____ candies _____ there?



4. How _____ milk _____ there?



Opposite words



Draw a line to match the word on the left to its opposite.

wet ●

● slow

hot ●

● many

long ●

● hard

fast ●

● dry

dark ●

● bright

soft ●

● short

smooth ●

● old

young ●

● rough

few ●

● cold

Questions	Possible Answers	
1. ____ is your name?	(a) What (c) When	(b) Where (d) Who
2. ____ is your favorite actress?	(a) What (c) When	(b) Why (d) Who
3. ____ are you from?	(a) What (c) When	(b) Where (d) Who
4. ____ is your birthday?	(a) Whose (c) When	(b) Where (d) Who
5. ____ color is your new car?	(a) What (c) Where	(b) How (d) Whose
6. ____ old are you?	(a) What (c) Which	(b) How (d) Whose
7. ____ books are these?	(a) Why (c) Where	(b) How (d) Whose
8. ____ did you quit your job?	(a) Who (c) Why	(b) Which (d) Whose
9. ____ are you going to America?	(a) Who (c) When	(b) What (d) Which
10. ____ aren't you going to Peter's party?	(a) What (c) Where	(b) How (d) Why

Choosing Punctuation Marks Worksheet

These are three kinds of punctuation marks in the English language.

Period (.) Exclamation Mark (!) Question Mark (?)

Directions: Read each sentence and choose the correct punctuation mark.

Example A: *Go home directly after school.*

Answer: (.)

1. I am so excited to see my family for Christmas _____
2. What day of the week is your favorite _____
3. You need to do your homework right after dinner _____
4. Please take out the trash when you get home _____
5. My favorite team won the game _____
6. What did you want to eat for lunch _____
7. I had a great time at your party _____
8. Do you know what time it is _____
9. How do we get to the amusement park _____

Verbs

Use these verbs to fill in the blanks below.

swim	play	drink	fly	wear
ride	write	drive	cut	read
ring	sing	draw	sleep	walk

1. You _____ a kite.
2. You _____ a car.
3. You _____ with a knife.
4. You _____ your uniform.
5. You _____ story books.
6. You _____ with a pen.
7. You _____ a bell.
8. You _____ a picture.
9. You _____ a horse.
10. You _____ games.
11. You _____ songs.
12. You _____ at night.
13. You _____ in the swimming pool.
14. You _____ along the road.
15. You _____ water.

CHOOSE THE CORRECT ANSWER

1. Is your brother _____ home.
a) On b) in c) at
2. No one can live _____ water.
a) Without b) over c) with
3. We sleep _____ night.
a) on b) for c) at
4. It's _____ time you told him the truth.
a) about b) in c) on
5. She has been absent _____ Wednesday.
a) for b) from c) since
- 6) Kamal has lived in this village _____ 1978.
a) since b) from c) for
7. The mountains were covered _____ snow.
a) with b) but c) except
8. The snake was killed _____ somebody.
a) from b) by c) for
- 9) The Kovai express starts _____ Coimbatore.
a) by b) from c) for
10. The girl standing _____ me was sneezing.
a) beside b) across c) during

Science

Worksheet 1

Q 1] Choose the odd one out and rewrite it again.

- 1) Stones, Wheat grains, Sand, Sugar _____
- 2) Ink, Fruit juice, Petrol, Milk _____
- 3) Cloth, Table, Chair, Computer _____

Q 2] Unscramble the following words:

- 1) ERTIOG _____
- 2) AEMIAAN _____
- 3) KETRICS _____
- 4) VYSCUR _____

Q 3] Match the following:

Column A	Answer	Column B
I. Sycamore		a. Dispersal by animals
II. Squirting Cucumber		b. Kharif crop
III. Dahlia		c. Rabi crop
IV. Bryophyllum		d. Dispersal by wind
V. Mango		e. Reproduction from root
VI. Gram		f. Dispersal by explosion
VII. Maize		g. Reproduction from leaves

Q 4] Find out the names of seven healthy food items in the given grid. The names may be in forward, backward and cross pattern.

A	S	S	S	D	V	B	K
B	U	T	T	E	R	F	L
C	G	P	U	G	E	I	M
D	A	U	V	T	A	S	N
E	R	L	W	A	D	H	O
F	S	S	X	B	E	I	P
G	M	E	A	T	F	J	Q
H	N	S	G	H	E	E	R

1) _____

2) _____

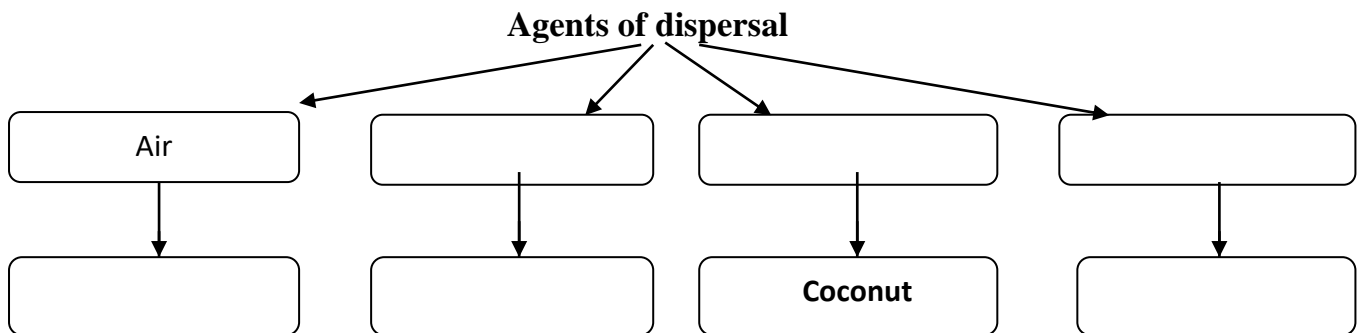
3) _____

4) _____

5) _____

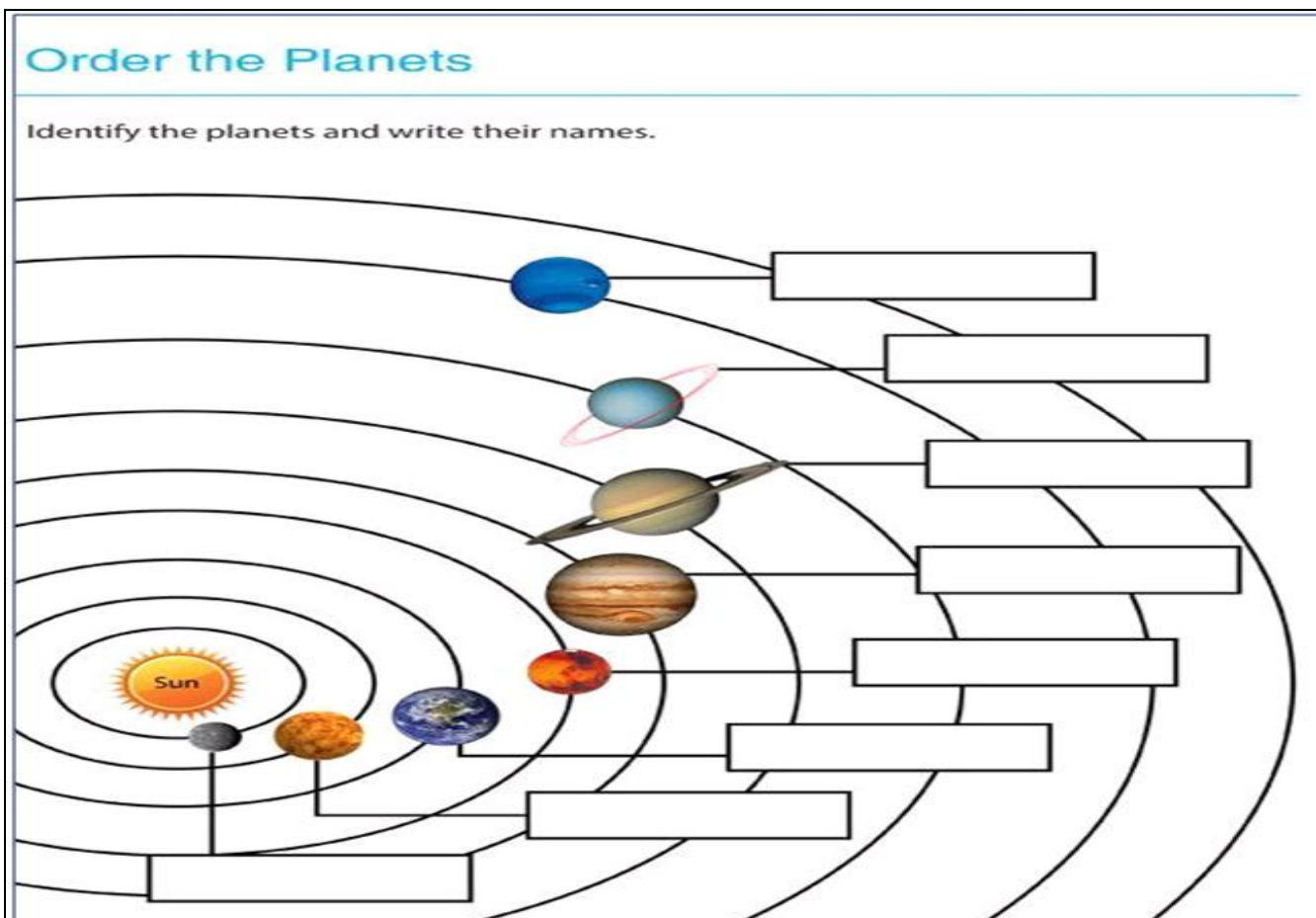
6) _____

Q 5] Complete the following web charts:



Q 6] Activity:

Action	Number of heart beats in one minutes
• At rest	
• After running	
• After Sleeping	
• After Jumping	



Q 8] Take some seeds of bean, gram, jowar and mustard. Sow them properly in soil and water them daily. Now observe the following and note down in the given table.

1. The number of days each of the seeds takes to germinate or sprout into a new plant.
2. The length of each seedling after six days.
3. The length of each plant after 10 days.

Seeds \Rightarrow	BEANS	GRAMS	JOWAR	MUSTARD
Number of days taken to germinate into a seedling				
Length of plant after six days				
Length of plant after ten days				

Now answer the following questions on the basis of your observations :

1. Which seed germinated in the shortest period of time?

Ans-

.....

.....

.....

2. Which seed took the longest time to germinate?

Ans-

.....

.....

.....

3. Which plant has shown the fastest growth in its length?

Ans-

.....

.....

.....

Mathematics

Worksheet 1

Compare using signs: Up to 100

In each set mark the correct sign.



90 ○ 89
<input type="radio"/> < <input type="radio"/> = <input type="radio"/> >

22 ○ 11
<input type="radio"/> > <input type="radio"/> = <input type="radio"/> <

73 ○ 83
<input type="radio"/> < <input type="radio"/> = <input type="radio"/> >

10 ○ 13
<input type="radio"/> < <input type="radio"/> = <input type="radio"/> >

42 ○ 36
<input type="radio"/> > <input type="radio"/> = <input type="radio"/> <

66 ○ 58
<input type="radio"/> < <input type="radio"/> = <input type="radio"/> >

91 ○ 91
<input type="radio"/> < <input type="radio"/> = <input type="radio"/> >

10 ○ 40
<input type="radio"/> > <input type="radio"/> = <input type="radio"/> <





FORMATION OF DIGITS

DIGITS	SMALLEST 6 - DIGIT NUMBER	GREATEST 6 - DIGIT NUMBER
0 , 2 , 5 , 6 , 7		
1 , 0 , 3 , 4 , 2		
9 , 4 , 8 , 0 , 3		
2 , 1 , 7 , 9 , 5		
6 , 0 , 1 , 8 , 4		

*Write the Highlighted Numbers Place Value and Face Value
(International System)*

Numbers	Place Value	Face Value
<u>3</u> 4,560,894	Thirty Million	3
6 <u>7</u> ,065,876		
<u>4</u> ,450,009		
<u>7</u> 89,987		

Q. Solve the following questions:

1. Insert commas according to the international place value system and write their names in words.

- a. 8678561 _____
- b. 31012568 _____
- c. 1256432 _____
- d. 324651 _____

2. Insert commas according to the Indian place value system and write their names in words.

- a. 48366 _____
- b. 837132 _____
- c. 3653154 _____
- d. 61563956 _____

 **Read the following questions carefully and solve :**

1. Tick (✓) the correct answer.

1 Lakh = _____ thousands.

- a. 10 b. 100 c. 1000 d. 10000

What is the place value of the digit **5** in 485601 ?

- a. 1 b. 5 c. 5000 d. 500

2. Who am I?

a. I am the largest 5-digit number with all different digits

b. Encircle the incorrect ones. Give reason for your answer.

- a. XC b. VX c. XCI d. XVX e. III f. LC g. IC





Observe the following Roman numerals and write them into Hindu-Arebic system:


XXIII	=	_____	LXX	=	_____
XXXV	=	_____	CLIII	=	_____
XXXIV	=	_____	CIX	=	_____

Observe the following numbers and convert them into Roman numerals:


62	=	_____	140	=	_____
81	=	_____	754	=	_____
29	=	_____	526	=	_____



Fundamental Operations



78	÷	39	=	
x				x
37	x	13	=	
=		=		=
	÷	3	=	962



Color By Number

1 -  - Brown

2 -  - Black

3 -  - Green


4 -  - Grey

5 -  - Red

6 -  - Pink

7 -  - Purple

8 -  - Yellow



Social Science

Work sheet No- 1

1. Refer page no.20,21,22 if these characteristics describe the GEOSPHERE, the ATMOSPHERE, the HYDROSPHERE or the BIOSPHERE:

- a) Ice and snow are included in the _____.
- b) Rocks and Earth's solid are part of the _____.
- c) The _____ is made of gases.
- d) The _____ has all the living things on Earth.
- e) Rivers, lakes and oceans are part of the _____.
- f) Humans live here in the _____.
- g) The _____ can be seen from the space as a blueish thin layer.
- h) Sediments and soil can be found in the _____.
- i) All the liquid water from the Earth is seen in the _____.




2. Look at this picture and label each part paying attention to what we have studied:



EARTH SYSTEMS AND THE UNIVERSE

1. NAME THE DIFFERENT EARTH SYSTEMS.



2. MATCH THE EARTH SYSTEM TO THE DESCRIPTION.

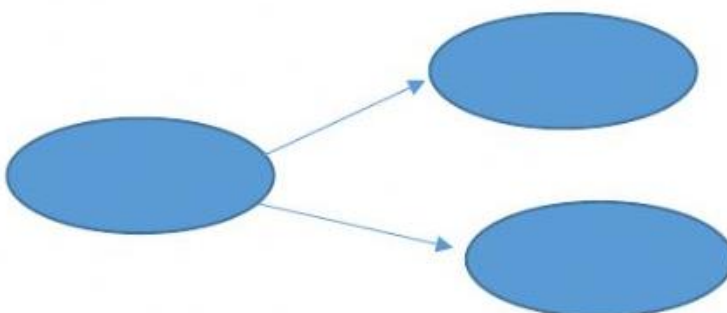
It covers the Earth like a blanket of air

It is the solid part of the earth, from the core to the surface.

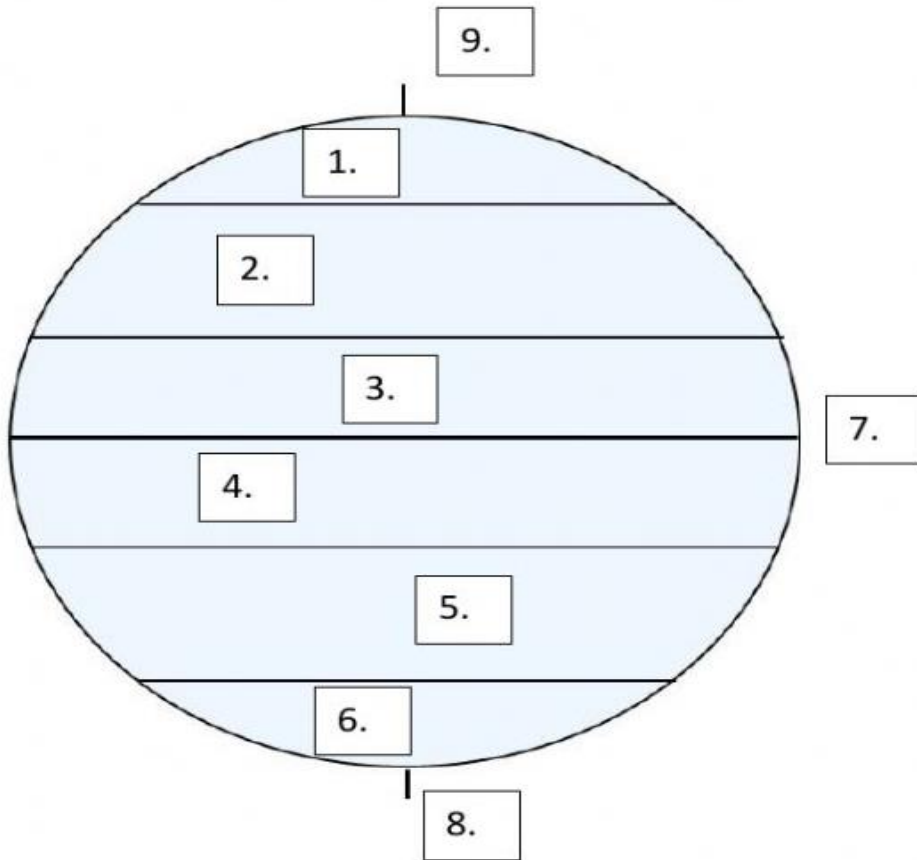
It contains all the water found on our planet.

It is the "life zone" of the Earth, and includes all living organisms

3. WHAT SYSTEMS INTERACT IN THIS NATURAL PHENOMENONS:



Climatic Zones and Lines Of Latitude




The Circle above represents the Globe. What does the places numbered represent. Write the number on the line provided.

Equator	_____	
North Pole	_____	
South Pole	_____	
Arctic Circle	_____	
Antarctic Circle	_____	
Tropical Zone	_____	_____
Temperate Zone	_____	_____

Identify the weather climate in your village or locality () tick it on the picture.



weather

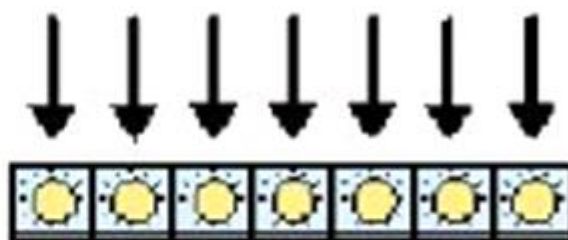


today

If it is cloudy shade the circle.



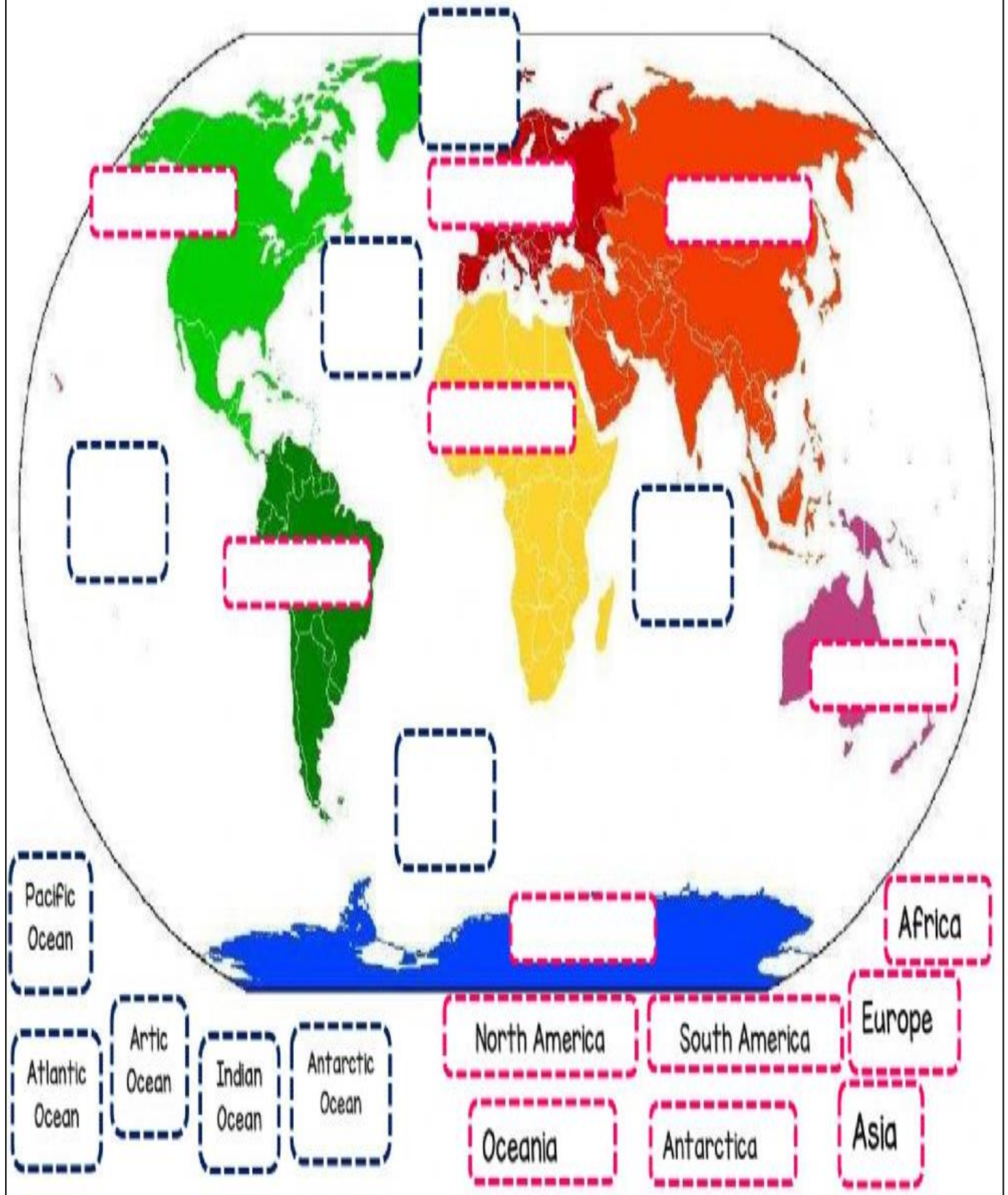
climate



every day

CONTINENTS AND OCEANS

Drag and drop the name of continents and oceans in the right place on the map.



Match. the following

1. Earth

2. Land

3. Water

4. Mountain

5. Hill

6. Valley

7. Island



Look at the picture and write there names given below the box

Use the word bank: island Earth hill water mountain land valley





Circle the words given below the box.

S	J	C	A	M	P	M	C
W	G	L	A	M	C	H	M
I	J	M	M	P	Y	Y	Z
M	V	K	B	E	A	C	H
S	U	M	M	E	R	M	S
M	H	O	T	E	B	H	U
K	O	I	G	U	F	U	N
W	A	T	E	R	O	Q	E


BEACH
CAMP
FUN
HOT


SUMMER
SUN
SWIM
WATER





Feelings


Complete the crossword.


1. 

2. 

3. 

4. 

3. 

4. 

Feelings

Find the different feelings.

S	M	I	O	T	J	C	O	C	G
F	T	F	E	H	A	P	P	Y	G
P	Y	H	K	X	A	A	L	Z	N
I	T	I	R	E	D	Z	B	Y	K
P	C	D	V	Q	G	D	S	C	E
N	T	C	F	R	E	R	V	Y	E
L	S	A	D	L	R	M	V	G	K
T	H	I	R	S	T	Y	G	N	J
X	T	Q	X	N	L	W	U	K	I
O	M	E	H	U	N	G	R	Y	C

[illegible]

[illegible]

Work sheet No 2

प्रश्न. 1) विविध पक्षांची नावे आणि आवाज व ते राहतात कोठे ते लिहा.

१. कबूतर

२. मोर

३. कोंबडी

४. बदक

प्रश्न. 2) डराव डराव या कवितेतील बेडकाची माहिती थोडक्यात लिहा.

This image shows a blank sheet of white paper with ten horizontal dashed lines, typical of primary-ruled notebook paper. The lines are evenly spaced and extend across the width of the page. There is no handwriting or other markings on the paper.

Work sheet No 3

प्रश्न १) विरुद्धार्थी शब्द लिहा.

१) कठीण ×

४) लहान ×

२) चाणाक्ष ×

५) काळा ×

३) गर्व ×

६) प्रिय ×

प्रश्न २) समानार्थी शब्द लिहा.

१. नदी -

४) फुल -

२. लता -

५) जंगल -

३. पक्षी -

६) लठ्ठ -

प्रश्न ३) वचन ओळख

१. मुले -

४. फळे -

२. घर -

५. माळा -

३. निदी -

६ राजवाडा -

प्रश्न. 4) उलट वाक्य सरळ करून बनवा.

१. गळा ब.

२. ल ग जं

३. मा इ न र दा

Hindi

Worksheet 1

दीपावली की छुट्टियाँ कैसी बीती -

विषय पर दो मित्रों के बीच होनेवाली बातचीत को संवाद रूप में लिखिए।



कीयल

शेर

आसमान

बच्चे

फल

मछली

1. जंगल का राजा.....है ।

2. फूल पर.....बैठी है ।

3. मोहन का..... है।

4. पिताजी बाजार से.....लाए हैं ।

5. बगीचे में.....खेल रहा ।


6. रमेश.....उड़ा रहा है ।

7. नीला है।

8. तालाब में.....तैर रही है ।

9.गाना गा रही है ।

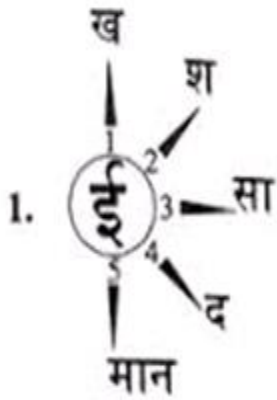
10. लाल किला.....में है ।



Worksheet 3

ई की मात्रा

गोले में दिए गए अक्षर को बाहर दिए गए अक्षरों के साथ जोड़कर शब्द बनाओ।



1. ईख
2. _____
3. _____
4. _____
5. _____



1. कीट
2. _____
3. _____
4. _____
5. _____



1. चील
2. _____
3. _____
4. _____
5. _____



1. खीर
2. _____
3. _____
4. _____
5. _____



1. छीका
2. _____
3. _____
4. _____
5. _____



1. गीला
2. _____
3. _____
4. _____
5. _____



1. जीरा
2. _____
3. _____
4. _____
5. _____

सप्ताह के दिनों , महीनों , गिनती पर आधारित रिक्त स्थानों को दिए गए शब्दों की सहायता से पूरा करो

।

नौ	जुलाई.	मंगलवार.	नवंबर.	सितंबर.
सोलह	अगस्त.	जनवरी.	शुक्रवार.	
बीस.	ग्यारह.	अक्टूबर.	दिसंबर.	बुधवार

1. आठ और दस के बीच में.....आता है ।
2. और अठारह के बीच में सत्रह आता है ।
3. बारह के पहलेआता है ।
4. उन्नीस के बाद.....आता है ।
5. जून के बाद.....आता है ।
6. सोमवार और बुधवार के बीच में आता है ।
7. शनिवार से पहले.....आता है ।
8. के बाद बृहस्पतिवार आता है ।
9. क्रिसमस के महीने में आता है ।
10. गांधी जयंतीके महीने में मनाई जाती है ।
11. शिक्षक दिवसके महीने में मनाया जाता है ।
12. गणतंत्र दिवसके महीने में मनाया जाता है ।

20



Worksheet 5

दिए गए शब्दों को अंकों में लिखिए ।

1. बाईस -

2. ग्यारह. -
3. पस्तीस -
4. सैंतीस -
5. छब्बीस -
6. दो -
7. इकतीस -
8. बारह -
9. पैंतालीस -
10. सत्रह -
11. नौ -
12. बीस -

Worksheet 6

संवाद

माँ :

सब्जीवाला :



Worksheet 7

नीचे लिखे वाक्यों को पढ़कर उनके लिए एक सही शब्द ढूँढ़ें।

सुनार	जंगली	चित्रकार	बढ़ई	नाई	जादूगर
किसान	सैनिक	धोबी	चरवाहा	कवि	लुहार

जो चित्र बनाता हो -

1) जो खेती करता हो -

2) जो सेना में काम करता हो. -



- 3) जो कपड़े धोता हो –
- 4) जो गहने बनाता हो -
- 5) जो जंगल में रहता हो –
- 6) जो लकड़ी का काम करता हो –
- 7) जो पशुओं को चरता हो _
- 8) जो कविता करता हो _
- 10) जो बाल काटता हो _
- 11) जो लोहे की वस्तुएँ बनाता हो _
- 12) जो जादू दिखता हो _



Worksheet 8

1. खाने में दिए चित्रों के नाम चुनो और सही चित्र के नीचे लेकर जाओ

वृक्ष	मृग	सेब	शेर	गृह	नृप
ऐनक		सैनिक		थैला	



--	--	--



--	--	--



--	--	--