

SECTION C

Q. Very short Answers (Any 4):-

Mark 8

26. Fabian collected 123 shells and Manjit collected 149 shells.
Find the total number of shells collected by both of them?

27. Sam has saved Rs. 17. He wants to buy a pen that costs Rs.25.
How much more money does he need to save?

28. Complete the pattern:

120, 115, 110, 105, 100, _____, _____, _____, _____

29. Subtract :

H	T	O
8	1	2
- 6	1	3

30. Write the place value and face value of the Underlined numbers:

Number	Place value	Face value
1. 4 <u>8</u> 6		
2. <u>9</u> 37		

Section D:

Q. Short Answers (Any 4):

Marks: 12

31. Write the expanded form and compare the given numbers:







Number	Expanded form	Write in words
1. 563		
2. 421		
3. 201		



32. Solve the following:

1. H	T	O	2. H	T	O	3. H	T	O
	6	3	4	5	8	7	8	8
+	5	6	- 2	8	7	+	1	7

33. Complete the following pattern:

1.							
2.							
3.	1A	2B	3C				

34. Solve the following:

- 3 hundreds 6 tens 2 ones from 7 hundreds 8 tens 4 ones
- Add : 4 hundred 5 tens 6 ones and 1 hundred 8 tens 7 ones

35.



- What is the position of Bunny and Farida?
- Who is at the second and fourth position?
- At what position is Akash standing?