

---

Venus World Schools  
Academic Year 2021-22  
Summative Test-1

Class- 3<sup>RD</sup>  
Subject-MATHS

Marks-50  
Time-2 hr

**SECTION-A**

**Q-1 State whether True or False -**

**5 Marks**

- a-When two edges meet, they form a corner.
- b-Line segments have two ends.
- c-Solids shapes are two-dimensional shape
- d-Cone shape have neither sides or a corner.
- e-Symmetrical shapes two parts are unequal.

**Q-2 Fill in the boxes with >, <, = sign**

**4Marks**

- a-7854 ..... 7584
- b- 1745..... 2754
- c-6872.....6827
- d- 4456.....4456

**Q-3 Match the following.**

**Column-A**

**Column- B**

**5marks**

- |                     |          |
|---------------------|----------|
| a-4x1000            | i - 1275 |
| b- .....x 800 =8000 | ii-1506  |
| c-1000+500+6        | iii-0    |
| d- 314+..... = 314  | iv- 4000 |

e  $1275 + 200 + 200 \dots\dots$

v- 10

### SECTION-B

**Q-4 Estimates the nearest 100s by first rounding off the numbers. 2marks**

a-  $624 + 317$

b-  $1257 + 2683$

**Q-5 Estimates the difference by first rounding off nearest 10's 2marks**

a-  $7763 - 4273$

b-  $769 - 232$

**Q-6 Arrange numbers in descending orders. 2Marks**

a- 4987, 6654, 8972, 8792, 5040

b- 2057, 4181, 3096, 3906, 4818



**Q-7 Extend the Following Pattern. 2Marks**

a- 315, 300, 285, 270, 255 ..... ..

b- 9, 11, 13, 15, 17, 19, 21, ..... ..

**Q-8 Name the following. 2Marks**

a- A  B .....

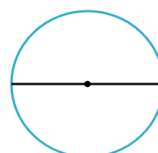
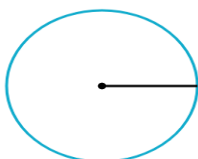
b- A  B  .....

**Q-9 Arrange the number in Ascending orders 2marks**

a- 6428, 4139, 8172, 4193, 5194

b- 4196, 9169, 4691, 4619, 3289

**Q-10 Name the following. 2marks**



a -----

b -----

Q-11 Complete the following pattern.

2marks

a- 

b- 

### SECTION-C

Q-12 Add the following.

4 marks

TH	H	T	O
	4	9	7
+	9	7	3

B-

TH	H	T	O
4	5	3	2
4	1	7	8
+			

C-

TH	H	T	O
1	5	8	3
7	6	8	5
+			

d-

TH	H	T	O
3	4	6	7
1	9	7	5
+			

**Q-13 Subtract the following.**

**4marks**

**a-**

TH	H	T	O
	5	7	4
-	2	9	7

**b-**

TH		H	T	O
	5	7	3	4
-	1	9	6	8

**c-**

TH		H	T	O
	9	0	0	0
-	3	6	9	5

**d-**

TH		H	T	O
	7	0	0	1
-	4	9	9	0

**Q-14 Multiply the following.**

**4Marks**

**a- 389 x 19**

**b- 534 x 16**

**c- 264 x 13**

**d- 243 x 23**

#### **SECTION-D**

**Q-15 Solve any two-word problems.**

**8marks**

- a- A book has 78 pages. How many Pages will be there in 26 such pages? -
- b- The sum of two number is 1200. If one number is 575. So find the another number.
- c- IN a hall there are 122 seats in each row. How many seats are there in 17 such rows?

