

Name:- _____ Date: _____


Class: Sr.KG.

Subject: - Maths

Marks:-60

- 1) Write 101 to 200 numbers
- 2) Tables _2 to 4
- 3) Numbers spellings 11 to 30
- 4) Missing numbers- 81 __ 83 __ 85 __ 87 __ 89 __
- 5) Count the objects and write the numbers in the given box.

Ex-

	T	O

- 6) Write after before and between numbers



Ex_1) 45__ 2) __34 3) 67 __ 68

- 7) Write the numbers in tens and ones column

Ex- 89

T	O

- 8) count the objects and circle the set that are less.

	
--	--

- 9) Put the correct sign in the box.(<,>=)




Ex- 32 14

- 10) Write the number which is given one more than the given

Ex- 15 ____ (ans -16)

11) Count and write the numbers in the boxes. Also put $>$, $<$, $=$ sign in the circle

Ex-.




 <input type="text"/>		 <input type="text"/>
--	---	--

12) Write the number which is more than the given numbers.

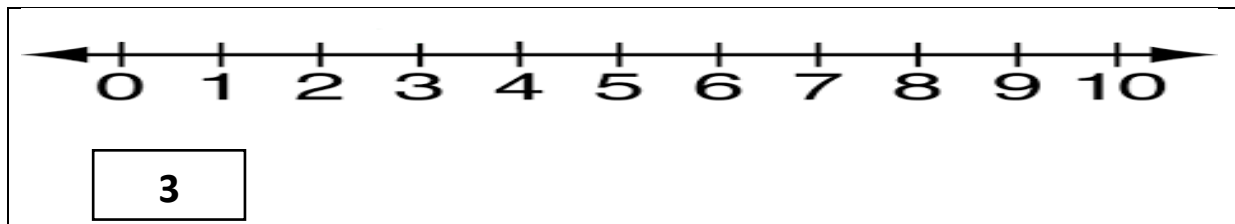
Ex- 38___ (ans -40)

13) Count the objects and write the numbers in the box.



Ex-

	+		=	
<input type="text"/>		<input type="text"/>		<input type="text"/>

14) Do the horizontal addition by using number line.



15) Count the objects and write the number in the box and add and write the answers in the box.

	<div><input type="text"/></div> <div>+</div> <div><input type="text"/></div>	<input type="text"/>
		<input type="text"/>
<input type="text"/>		<input type="text"/>

16) Do the addition.

EX- $4+3=$