

# Sridhar International School

<b>Subject:</b> Computer	<b>Grade:</b> II
<b>Topic:</b> Reasoning and Analysis	<b>Ref No:</b> SIS 23-24/II/nt/comp/008

## EXERCISES

A] Fill in the blanks with the help of the words given in the box.

**Number      Analysis      Pyramid      Reasoning**

1. **Analysis** means to closely examine the problem.
2. **Number** grid is a grid where each grid is solved by reading the instructions given.
3. **Reasoning** means to find a solution to the problem.
4. A number **Pyramid** is a pyramid of numbers where the number in each space is the total of the two numbers below it.

B] Answer the following questions.

1. Name any two directions.

**Answer:** North and South

2. From which direction the sun rises?

**Answer:** East

## EXTRA NOTES

A] Tick (✓) the correct option.

1. The sun sets in the **West**.

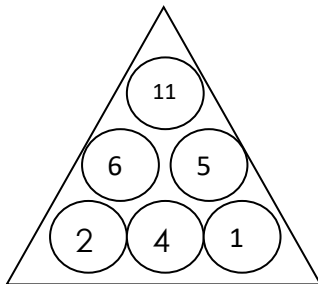
(a) West      (b) South      (c) North      (d) East

2. There are **four** directions.

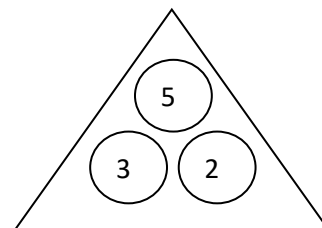
(a) one      (b) two      (c) three      (d) four

B] Solve the Number Pyramid.

1.



2.

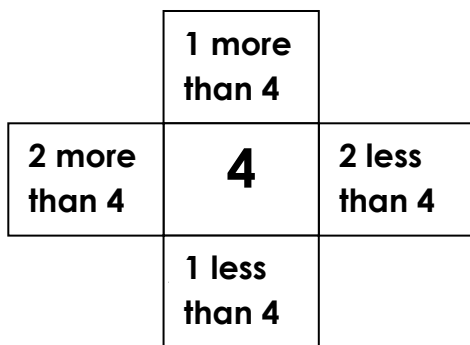


✚ Instruction to solve the number pyramid:

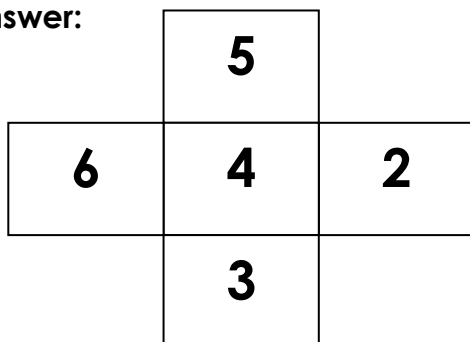
- Add the numbers in the lower two circles to get an answer for the above circle.
- For example,  $2 + 4 = 6$   
 $4 + 1 = 5$   
 $6 + 5 = 11$

C] Read the instructions given on the number grid and solve it.

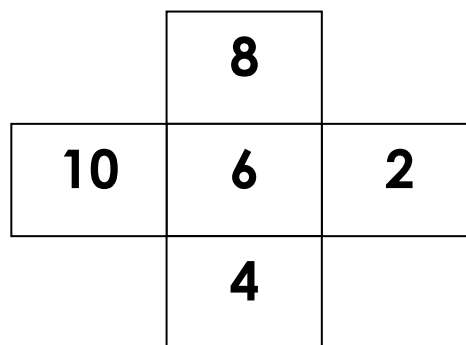
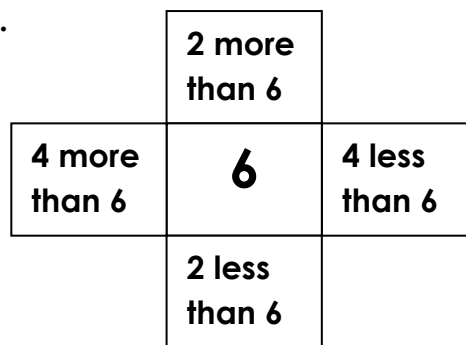
1.



Answer:



2.



[NOTE: Copy these notes on the classwork side of your notebook.]