

Blooming Buds School
AFFILIATED TO CISCE, NEW DELHI – KA366 (ICSE SYLLABUS)

Revision worksheet – 2022-23

Class – I

Subject –Computer

I) Fill in the blanks.

- 1) You should use a _____ cloth to clean the computer. (wet / dry)
- 2) You should press the keys of your computer _____. (hard / gently)
- 3) You should eat _____ the computer table (away from / on)
- 4) _____ is circular in shape. (CD / Pen drive)
- 5) _____ is placed inside the CPU box and can be used to store data.
(Hard disk/ Store data)
- 6) Which is the longest key on the keyboard. _____ key. (delete / Spacebar)

II) True or False.

- 1) Eraser tool can be used to erase a part of a picture.
- 2) The Spacebar key is the longest key on the keyboard.
- 3) There are seven colours in the Colors box.
- 4) You can draw pictures on the Drawing Canvas.
- 5) Pen drive is kept inside the CPU.
- 6) We can talk loudly in the computer lab.
- 7) You should always share your computer with others.

<input type="checkbox"/>
<input type="checkbox"/>
<input type="checkbox"/>
<input type="checkbox"/>
<input type="checkbox"/>
<input type="checkbox"/>
<input type="checkbox"/>

III) Match the following.

Tasks

- 1) To move up and down a page
- 2) To move items on the monitor
- 3) To open an item on the monitor
- 4) To select items on the monitor

Mouse Actions

- Dragging
- Single-click
- scrolling
- Double-click




III) Identify the storage device.

- 1) I can be carried in a pocket or key chain. _____
- 2) I am placed inside the CPU box. _____
- 3) I look exactly like a DVD. _____
- 4) I am circular in shape and I can store more data than a CD. _____



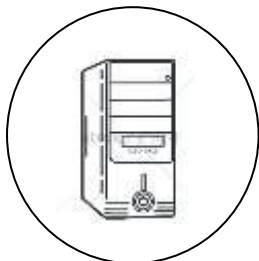
IV) Find out the names of these devices and tools by striking off the letter 'K'

- 1) KKEKKKRAKKKSKKEKKRK _____
- 2) TKKKUKXKKKPKKAKKIKKNKKKTKKK _____
- 3) PKKKEKNKKDRKKKIKKKVKKEK _____
- 4) KKMKOKKUKKKSKKKEKK _____
- 5) KSKCKRKKOKKLKLK _____

V) Match the following tools to their uses.

- 1)  a) I am used to rub or erase a part of a drawing.
- 2)  b) I am used to draw various free hand shapes.
- 3)  c) I have many picture that can be used to draw nice colourful drawings.

VI) Tick the Storage device .



- 1) A _____ is placed inside a circle.
- 2) A _____ is placed inside a box or a square.
- 3) A _____ is placed inside a star.
- 4) A _____ is placed inside a cloud.

VII) Find these devices that you learnt about in the word grid.

[Pen drive , Hard disk , CD , DVD , Monitor]

M	A	Z	P	L	K	S	M	V	F
O	B	Y	E	R	Y	F	I	K	D
N	J	S	N	S	O	C	D	A	V
I	F	G	D	P	R	X	M	Z	O
T	E	M	R	A	D	H	W	H	Q
O	Q	A	I	X	T	S	K	J	Y
R	B	D	V	D	X	P	Y	R	L
P	T	L	E	N	W	C	Z	U	E
L	U	C	X	H	V	Z	N	F	G
H	A	R	D	D	I	S	K	O	N

VIII)Colour the mouse and match the mouse parts with the labels.

Right button

Left button

Scroll button

Tail

