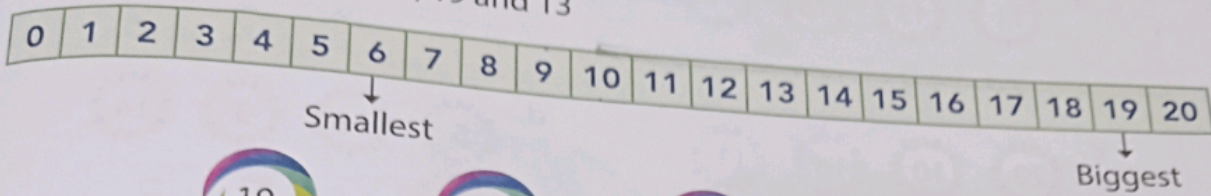


Let us now use the number strip to compare numbers and arrange them from the biggest to the smallest.  
Consider the numbers: 6, 7, 19 and 13



## My Fun Time

21st Century Skills Analysis

Make a list of names of your family members and friends. Count the number of letters in each of their names. Whose name has the most number of letters? Also, write the number names for each.


## My Practice Time 5



INT



1. Arrange the numbers from the smallest to the biggest.



5 8 10 15




1 3 4 6



15 18 19 20



5 8 11 13



8 13 17 18



3 7 12 14