




Recap

1. Match the following sources of water with their correct descriptions:



This structure can pump water from underground.

It is the main source of water for all waterbodies.

Water from the cleaning unit is packaged in this form.


2. Tick (✓) the correct way of dumping waste.



We should throw all waste materials into lakes and rivers.



We should throw all waste materials into dustbins.



3. Write whether the following statements are true or false:

(a) All living beings need water to live.

true

(b) Pure water has no colour, taste, or smell.

true

(c) All waterbodies are filled by taps.

true

(d) Water from waterbodies comes directly to our taps.

false