

Name: \_\_\_\_\_

Subject: Mathematics

Date: \_\_\_\_\_

Roll No : \_\_\_\_\_

Grade : 2

Teacher Sign : \_\_\_\_\_

Total Marks: 10M

**Q.1) Read the clock and answer the questions given: (3M)**



1. What time is it on the clock?

\_\_\_\_\_

2. What time will it be in 3 hours?

\_\_\_\_\_

3. What time will it be in 10 minutes?

\_\_\_\_\_

4. What time was it 30 minutes ago?

\_\_\_\_\_



1. What time is it on the clock?

\_\_\_\_\_

2. What time will it be in 5 minutes?

\_\_\_\_\_

3. What time will it be in 4 hours?

\_\_\_\_\_

4. What time was it 10 minutes ago? \_\_\_\_\_



1. What time is it on the clock?

\_\_\_\_\_

2. What time will it be in 25 minutes?





\_\_\_\_\_

3. What time will it be in 6 hours?

\_\_\_\_\_

4. What time was it 15 minutes ago? \_\_\_\_\_

**Q.2** Ayush interviews his classmates and made a list on how each of them comes to school. Here is what he found. 4M

Bus	
Cycle	
Car	
On foot	
Rickshaw	

**Answer the following questions:**

Q1. What are the different ways of traveling??

Ans. \_\_\_\_\_

Q2. Which mode is most preferred by students?

Ans. \_\_\_\_\_

Q3. How many students come to school by rickshaw?

Ans. \_\_\_\_\_

Q4. How many students are there in his class?

Ans. \_\_\_\_\_

**Q.3** Fill in the name, number of faces, edges, vertices for each shapes.

**6x1/2=3**

