

Name: _____.

Subject: Mathematics

Date: _____

Grade: 1 _____

Roll No : _____

Teacher Sign : _____

Total Marks: 10M

Q.1) Look at the following patterns carefully and colour the last shape. (5M)





Q2.Put a tick ✓ in the correct box.

(5M)



1. Which of these is a triangle?

☐☐☐

2. Which of these is a square?

☐☐☐


3. Which of these is an ellipse?

☐☐☐

4. Which of these is a circle?

☐☐☐

5. Which of these is a rectangle?

☐☐☐