

Name: _____

Science Worksheet

Date: _____

Grade: III

Total Marks: 10M

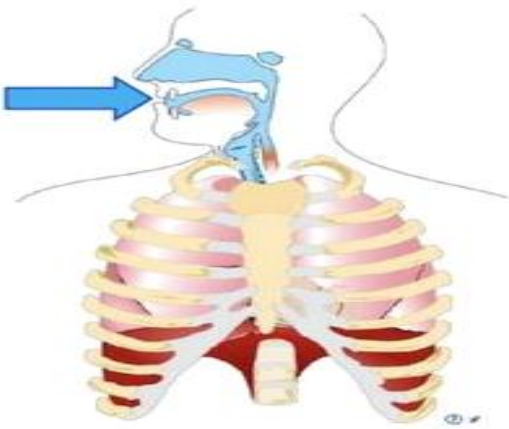
Topic: Human Body

Q1. Choose the correct answer and copy it in the box:

4M

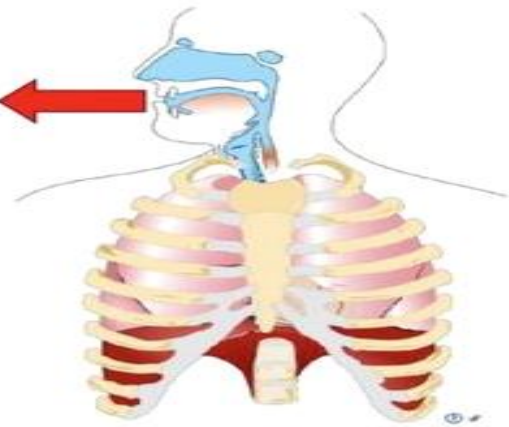
INHALATION

- We breathe **in/out** (1) air.
- Our lungs get **smaller/bigger** (2) .
- We inhale **oxygen/carbon dioxide** (3) .
- The air passes to our **lungs/blood** (4) and then our **lungs/blood** (5) .



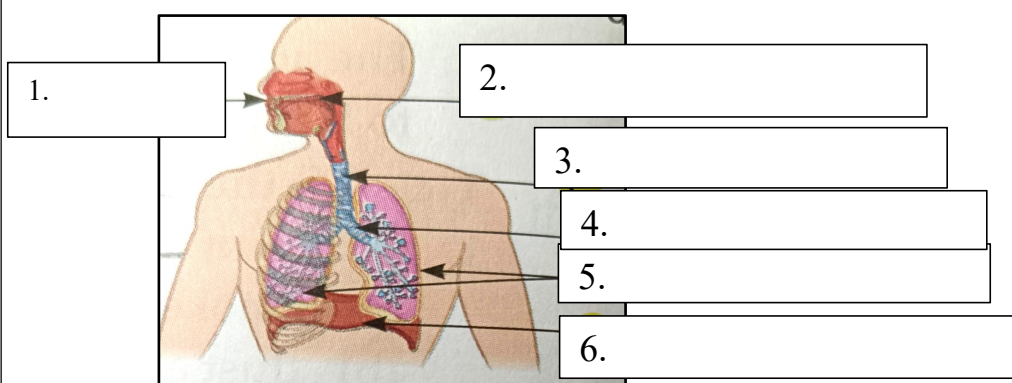
EXHALATION

- We breathe **in/out** (6) air.
- Our lungs get **smaller/bigger** (7) .
- We exhale **oxygen/carbon dioxide** (8) because our body doesn't need it.



Q2. Identify and label the following Respiratory system organs from the clue box:

2M



1. nasal passage
 2. windpipe
 3. ribcage
 4. lungs
 5. nostrils
 6. diaphragm

Q3. identify and label the different internal organs in our body:

4M

